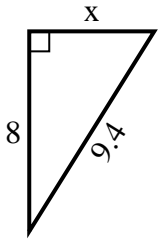


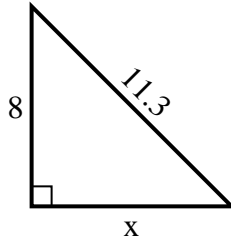


Find the value of X.

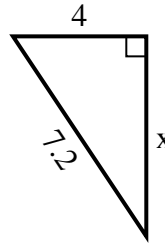
1) perimeter = 22.4 u



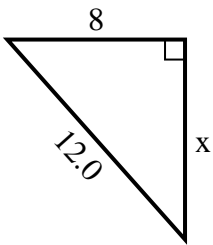
2) perimeter = 27.3 u



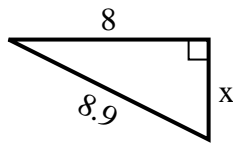
3) perimeter = 17.2 u



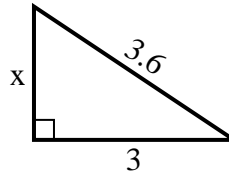
4) perimeter = 29 u



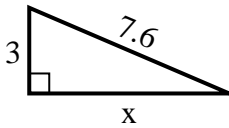
5) perimeter = 20.9 u



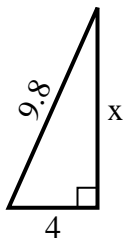
6) perimeter = 8.6 u



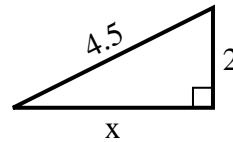
7) perimeter = 17.6 u



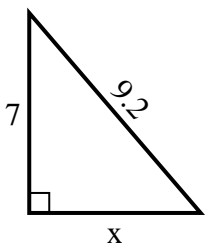
8) perimeter = 22.8 u



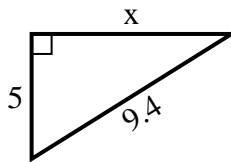
9) perimeter = 10.5 u



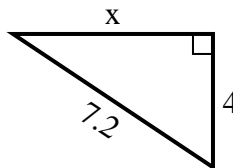
10) perimeter = 22.2 u



11) perimeter = 22.4 u



12) perimeter = 17.2 u



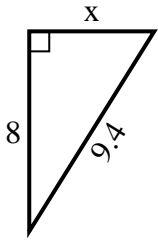
**Answers**

1. \_\_\_\_\_
2. \_\_\_\_\_
3. \_\_\_\_\_
4. \_\_\_\_\_
5. \_\_\_\_\_
6. \_\_\_\_\_
7. \_\_\_\_\_
8. \_\_\_\_\_
9. \_\_\_\_\_
10. \_\_\_\_\_
11. \_\_\_\_\_
12. \_\_\_\_\_

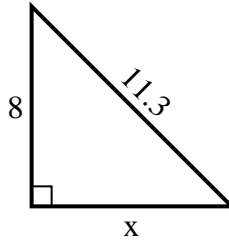


Find the value of X.

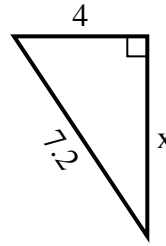
1) perimeter = 22.4 u



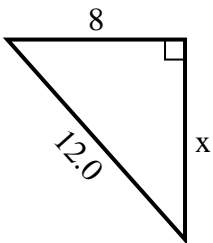
2) perimeter = 27.3 u



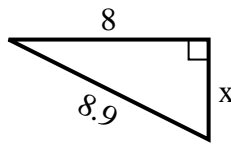
3) perimeter = 17.2 u



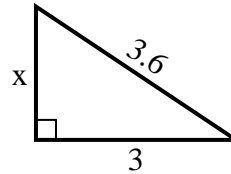
4) perimeter = 29 u



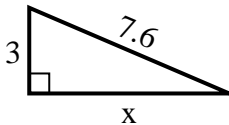
5) perimeter = 20.9 u



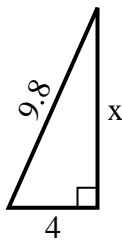
6) perimeter = 8.6 u



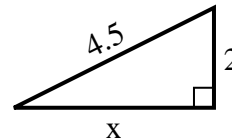
7) perimeter = 17.6 u



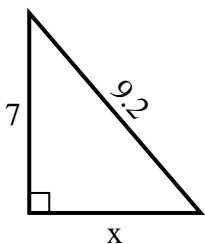
8) perimeter = 22.8 u



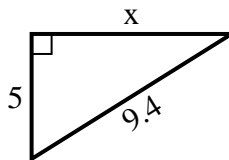
9) perimeter = 10.5 u



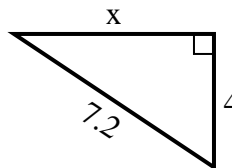
10) perimeter = 22.2 u



11) perimeter = 22.4 u



12) perimeter = 17.2 u



Answers

1. 5

2. 8

3. 6

4. 9

5. 4

6. 2

7. 7

8. 9

9. 4

10. 6

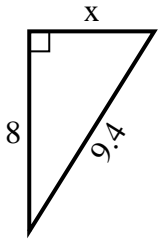
11. 8

12. 6

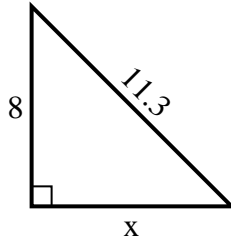


Find the value of X.

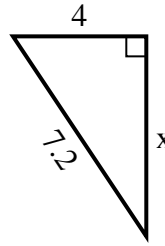
1) perimeter = 22.4 u



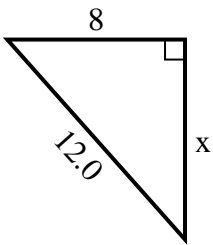
2) perimeter = 27.3 u



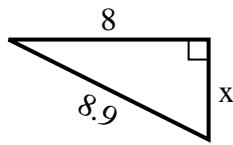
3) perimeter = 17.2 u



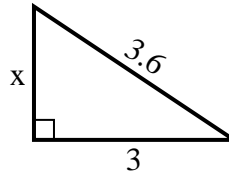
4) perimeter = 29 u



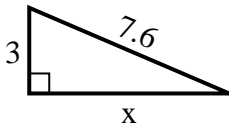
5) perimeter = 20.9 u



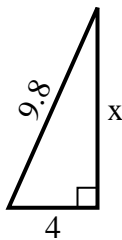
6) perimeter = 8.6 u



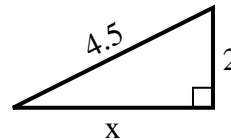
7) perimeter = 17.6 u



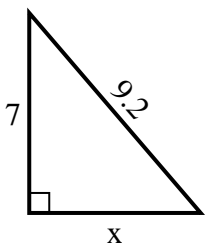
8) perimeter = 22.8 u



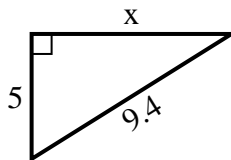
9) perimeter = 10.5 u



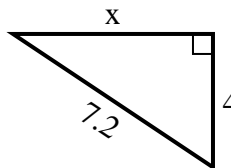
10) perimeter = 22.2 u



11) perimeter = 22.4 u



12) perimeter = 17.2 u



**Answers**

1. \_\_\_\_\_
2. \_\_\_\_\_
3. \_\_\_\_\_
4. \_\_\_\_\_
5. \_\_\_\_\_
6. \_\_\_\_\_
7. \_\_\_\_\_
8. \_\_\_\_\_
9. \_\_\_\_\_
10. \_\_\_\_\_
11. \_\_\_\_\_
12. \_\_\_\_\_